




Continue counting the baubles.

Tia saw three reindeer.
Esin saw two reindeer.

How many did they see altogether?



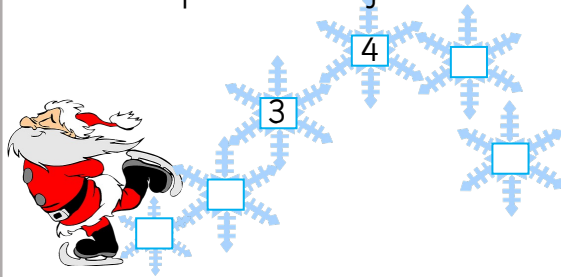
Circle the smallest tree.



How many presents can you count?



Complete the snowflakes.




Continue the repeating pattern:



Draw one more hat.



Now there are _____ hats.



Continue counting the baubles.


Tia saw three reindeer.
Esin saw two reindeer.

How many did they see altogether?

5



Circle the smallest tree.

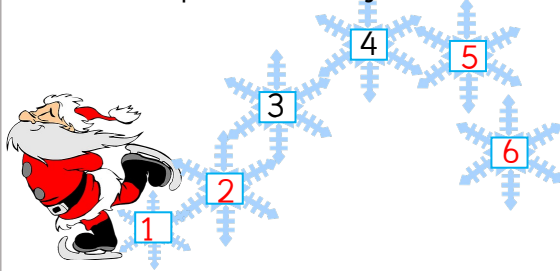


How many presents can you count?



4

Complete the snowflakes.



Continue the repeating pattern:



Draw one more hat.



Now there are 8 hats.