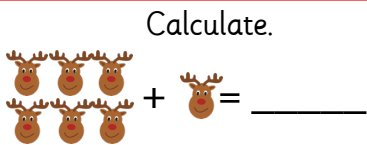


Draw lines to match the number bonds to 10.



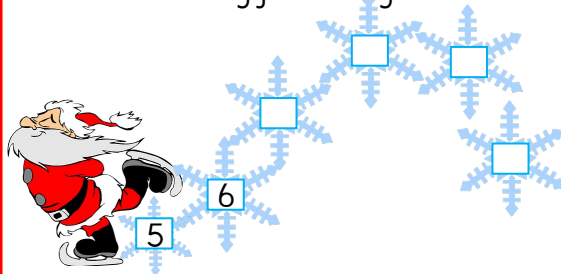
5 of my baubles fall off the tree!
Write the number sentence to show this.



How many presents can you count?



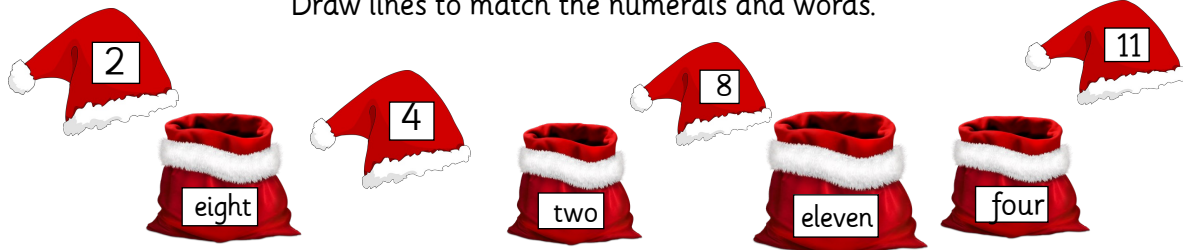
Continue counting from the given number.

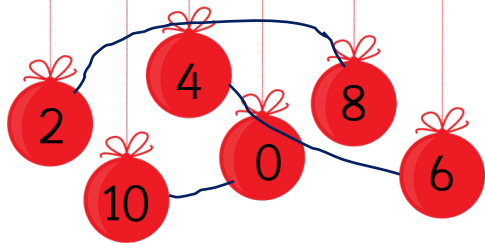


Three elves take a hat.
How many will be left?

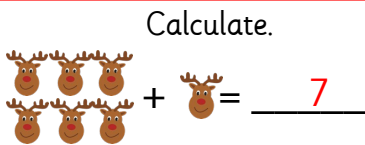


Draw lines to match the numerals and words.





Draw lines to match the number bonds to 10.



5 of my baubles fall off the tree!
Write the number sentence to show this.



$$18 - 5 = 13$$

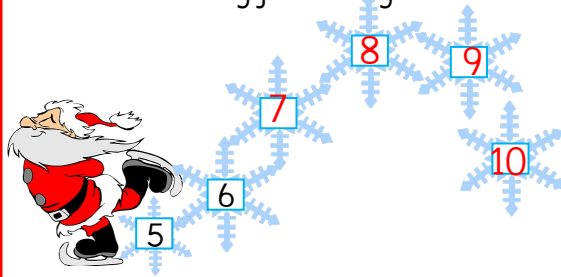
How many presents can you count?



37


(accept +/- 2, as some may be hidden)

Continue counting from the given number.



Three elves take a hat.
How many will be left?

4



Draw lines to match the numerals and words.

