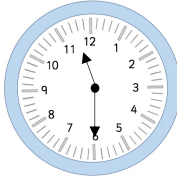


Leanna hangs  $\frac{3}{4}$  of these baubles on her tree.



How many baubles are on her tree?

Santa will arrive at exactly midnight.  
How many minutes do the children have left to wait?




A garden centre is selling Christmas trees.

It started with 342 trees and sold 181.  
How many are left?




Tia and Zach are opening presents.



Zach's presents



Tia's presents

Tia has her birthday on Christmas day.  
This means she has double the number  
of Zach's presents.

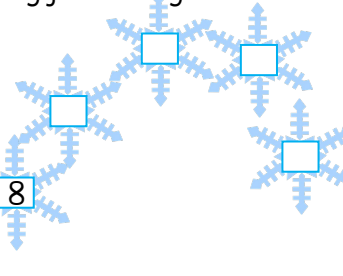
Zach has 4 presents left to open.  
He has already opened 3.  
How many presents must Tia have?

Continue counting from the given number.



4

8



Circle the picture that shows the present after  
turning 3 right angles clockwise.



Tia is going Christmas shopping.

She has this £20 note.



Can she afford to buy her mum a necklace  
and her brother a teddy? How much will she spend?



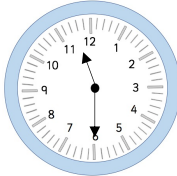
Leanna hangs  $\frac{3}{4}$  of these baubles on her tree.



How many baubles are on her tree?

9

Santa will arrive at exactly midnight.  
How many minutes do the children have left to wait?



30 minutes

A garden centre is selling Christmas trees.

It started with 342 trees and sold 181.  
How many are left?



	<del>2</del>	1	
	3	4	2
-	1	8	1
<hr/>			
	1	6	1
		1	6
			1

Tia and Zach are opening presents.



Zach's presents




Tia's presents

Tia has her birthday on Christmas day.  
This means she has double the number of Zach's presents.

Zach has 4 presents left to open.  
He has already opened 3.  
How many presents must Tia have?

14

Continue counting from the given number.



Circle the picture that shows the present after turning 3 right angles clockwise.



Tia is going Christmas shopping.

She has this £20 note.



Can she afford to buy her mum a necklace and her brother a teddy? How much will she spend?



Yes, she will spend £17.50.