


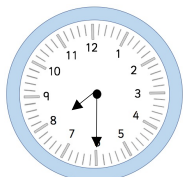


A roll of wrapping paper is 100cm long.
The children use this much of the wrapping paper.
How many cm did each child use?

 $\frac{8}{20}$
 $\frac{1}{20}$
 $\frac{5}{10}$

It is the evening and Santa will arrive in 245 minutes.
What will the time be in the 12hr and 24hr clock?



12 hour:

24 hour:

A garden centre is selling Christmas trees.
It buys a bulk load from Norway, spending £6,225.
How many trees were bought?

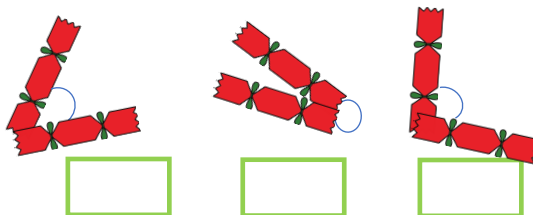


Here are the prices for Santa's grotto.

	online	on the door
Adult 16 +	£12.89	£13.50
Junior 5 - 15	£8.75	£9.50
Under 5	£4	£5
Family pass 1 (4 members, at least 2 under 16s)	£35.25	£40
Family pass 2 (6 members, at least 3 under 16s)	£45.60	£52.30

Two adults and two juniors pay the cheapest combination online for their tickets.
A 3-year-old friend and his mum will meet them and pay at the door.
How much is the entire cost?

Look at the angles the crackers are creating.
Measure each angle.



Santa has some presents in his sack.
5 presents weigh 6kg.
His sack weighs 36,000g.



How many presents are in his sack?

A nursery school orders 327 selection boxes for the children.

Each box contains 14 different chocolate bars.
How many chocolates bars are bought altogether?



A roll of wrapping paper is 100cm long.
The children use this much of the wrapping paper.
How many cm did each child use?



$$\frac{8}{20}$$

40cm



$$\frac{1}{20}$$

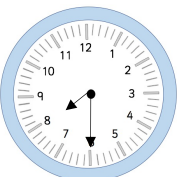
5cm



$$\frac{5}{10}$$

50cm

It is the evening and Santa will arrive in 245 minutes.
What will the time be in the 12hr and 24hr clock?



12 hour:

12:35am

24 hour:

00:35

A garden centre is selling Christmas trees.
It buys a bulk load from Norway, spending £6,225.
How many trees were bought?



249

Here are the prices for Santa's grotto.

	online	on the door
Adult 16 +	£12.89	£13.50
Junior 5 - 15	£8.75	£9.50
Under 5	£4	£5
Family pass 1 (4 members, at least 2 under 16s)	£35.25	£40
Family pass 2 (6 members, at least 3 under 16s)	£45.60	£52.30

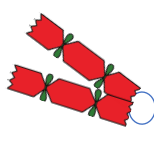
Two adults and two juniors pay the cheapest combination online for their tickets.
A 3-year-old friend and his mum will meet them and pay at the door.
How much is the entire cost?

£53.75

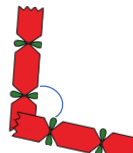
Look at the angles the crackers are creating.
Measure each angle.



Approx 45°



Approx 300°



Approx 100°

Santa has some presents in his sack.
5 presents weigh 6kg.
His sack weighs 36,000g.



How many presents are in his sack?

30

A nursery school orders 327 selection boxes for the children.

Each box contains 14 different chocolate bars.
How many chocolates bars are bought altogether?

	3	2	7	
X		1	4	
<hr/>				
	1	3	0	8
	3	2	7	
<hr/>				
	4	5	7	8

4,578 bars

